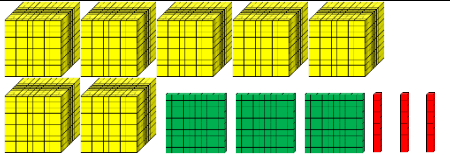
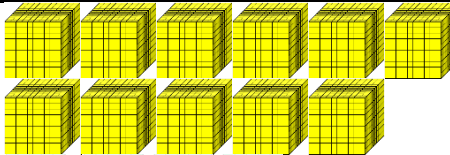
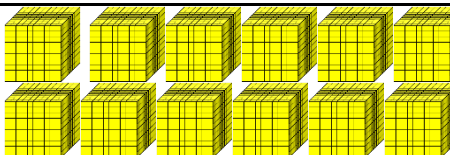
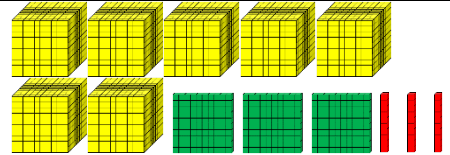
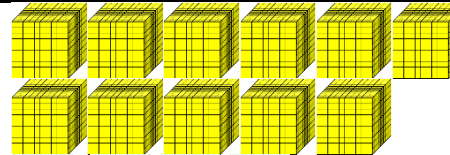
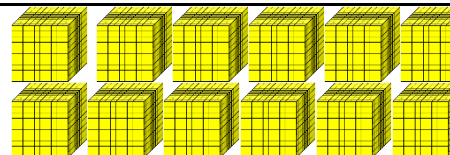


Exercice :

	= ... + ... + ... = ...
	= ... + ... + ... = ...
	= ... + ... + ... = ...

Exercice :

	= ... + ... + ... = ...
	= ... + ... + ... = ...
	= ... + ... + ... = ...

Exercice :

Dans le nombre :	Le chiffre 5 représente le <u>chiffre</u> des	Le <u>nombre de</u> centaines est :
13 542		
15 819		
24 475		

Exercice :

Dans le nombre :	Le chiffre 5 représente le <u>chiffre</u> des	Le <u>nombre de</u> centaines est :
13 542		
15 819		
24 475		